







Best Math Friends

Name _____

CCSS: 1.OA.1, 1.OA.2, 2.OA.1

Instructions: Answer each historical figure's word problem correctly.

	<p>Babe Ruth had eight jellybeans. He gave four to one of his coaches. How many did he have left for himself?</p>		<p>Ben Franklin conducted nine science experiments. His son conducted two. How many fewer did his son conduct than him?</p>
	<p>Abraham Lincoln split 12 logs. His friend Tom split seven logs. How many more logs did Abraham split?</p>		<p>Jackie Robinson hit 12 triples in 1949, which was eight more than he hit in 1950. How many triples did he hit in 1950?</p>
	<p>Betsy Ross sewed six flags on Tuesday and seven flags on Wednesday. How many total flags did she sew?</p>		<p>Amelia Earhart flew had seven pairs of flight glasses. Her co-pilot, Fred Noonan, also had seven pairs of flight glasses. How many pairs of flight glasses did they have together?</p>